




Découvrir


## Le jeu de l'oie



Voici les scores de plusieurs enfants.

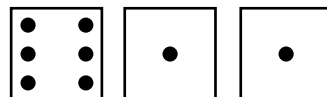
**Colorie la case** où ils parviennent, de la couleur demandée,  
**puis écris la somme** de leurs points.

Anaïs : en bleu




$$\_\_ + \_\_ + \_\_ = \_\_$$

Martin : en vert



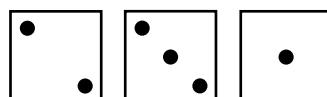
$$\_\_ + \_\_ + \_\_ = \_\_$$

Marie : en rouge



$$\_\_ + \_\_ + \_\_ = \_\_$$

Léo : en jaune



$$\_\_ + \_\_ + \_\_ = \_\_$$

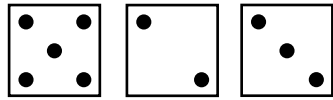


Retenir




S'entraîner

Complète.



$$5 + 2 + 3 = 7 + 3 = \underline{\quad}$$




$$\underline{\quad} + \underline{\quad} + \underline{\quad} = \underline{\quad}$$

$$\underline{\quad} + \underline{\quad} = \underline{\quad}$$

1 Complète les égalités.



$$\underline{\quad} + \underline{\quad} + \underline{\quad} = \underline{\quad}$$

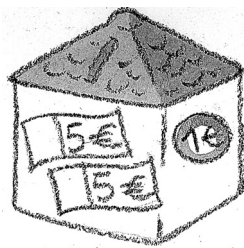


$$\underline{\quad} + \underline{\quad} + \underline{\quad} = \underline{\quad}$$




$$\underline{\quad} + \underline{\quad} + \underline{\quad} = \underline{\quad}$$

2 Complète les égalités pour savoir combien possède chaque enfant.




Clara

$$\underline{\quad} + \underline{\quad} + \underline{\quad} = \underline{\quad}$$



Éva

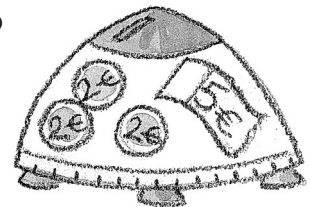
$$\underline{\quad} + \underline{\quad} + \underline{\quad} = \underline{\quad}$$



Akim

$$\underline{\quad} + \underline{\quad} + \underline{\quad} + \underline{\quad} = \underline{\quad}$$

Théo



$$\underline{\quad} + \underline{\quad} + \underline{\quad} + \underline{\quad} = \underline{\quad}$$