
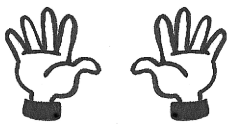




Continue les lignes.



9




10



Écris dans chaque case le chiffre qui convient.














1	2	3	4	5	6	7	8	10
---	---	---	---	---	---	---	---	----

1	2	3	4	5	6	7	8	9
---	---	---	---	---	---	---	---	---